

## **St John the Baptist BNS Cashel**



**Work package for Mr Coskeran's (Room 9) and Ms Quinn's (Room 8) Third Classes**

**Week beginning Monday 18 May 2020**

Hello everyone/Dia dhaoibh go léir!

Another week down and another week closer to summer holidays when you can finally put away the books and your parents can hang up their teaching caps and enjoy a well earned break. Click on the links below to hear an introductory message from your teacher. Each subject area also contains a link to a voice over which will hopefully help explain the different activities.

Mr Coskeran: <https://bit.ly/2WDWDDi>

Ms Quinn: <https://bit.ly/3cESdlp>

Here's your plan for the week ahead. Remember to continue to do your best and note that you can now communicate with us via our school email address either [laurencecoskeran@cashelbns.ie](mailto:laurencecoskeran@cashelbns.ie) or [miriamquinn@cashelbns.ie](mailto:miriamquinn@cashelbns.ie) .

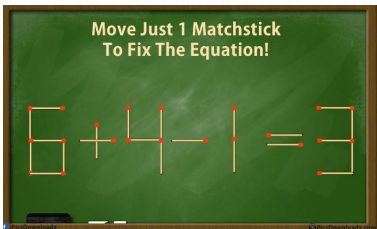

You can send us photos of your work, send photos of you completing some of the tasks that we've set or ask us a question or query about the assigned work package. If you don't want any pictures put on the website, then you can just state this in the email. But, please, do get in touch with us.

We would ask that your parents send me an email this week, regardless, so that we've got your families' email address for correspondence.

We hope to see you all soon.

*Mr Coskeran and Ms Quinn*

## CURRICULUM ACTIVITIES FOR THE WEEK

Subject/Area	Content - Offline Work	Websites/other instructions
<b>Numeracy</b>  <b>Ravishing Revision</b>  This week's topic is once again 'Time' See the bottom of the pack for some bonus questions on time tables!  Interactive Clock <a href="https://bit.ly/2Wl9yD6">https://bit.ly/2Wl9yD6</a>	<p><b>Master Your Maths</b> - Please see the bottom of the package for some New Wave Mental Maths questions. See answers to Week 30 MYM on sheet attached below.</p> <p><b>Tables</b> x 4 Write out in your copy three days this week.</p> <p><b>Maths Puzzle 1</b> (2 possible solutions)</p>  <p><b>Maths Puzzle 2 - Warning - Very Difficult!</b> <b>What is the next number in the sequence?</b></p> 	<p><b>Click the link to hear Mr Coskeran explain this week's Maths</b></p> <p><a href="https://bit.ly/3cExgqP">https://bit.ly/3cExgqP</a></p> <p><b>Master Your Maths</b> (Online Book)  <a href="https://bit.ly/3dwXWKU">https://bit.ly/3dwXWKU</a></p> <p><b>Daily 10</b>  <b>Tables:</b> Mon - Fri - 5 minutes            Hit The Button  <a href="https://bit.ly/2ycmBnV">https://bit.ly/2ycmBnV</a></p> <p>Tables Balloon Burst  <a href="https://bit.ly/2xJQeNz">https://bit.ly/2xJQeNz</a></p> <p>Daily 10  <a href="https://bit.ly/3bDrjsA">https://bit.ly/3bDrjsA</a></p>

## Literacy

### Reading

Boys using **Sounds In Focus 2** please log in to **My Read at Home 2**.

Read pages 50, 51 & 52 (3 texts for this week) and answer questions in your copy.

(feel free to log in to Read at Home 3 if you prefer)

Boys using **Sounds In Focus 3** please log in to **My Read at Home 3**.

Read pages 26, 27 & 28 (3 texts for this week) and answer questions in your copy.

### Phonics/Spellings

Complete Unit 32 in your Sounds In Focus workbook.

(Any parts you cannot do, skip them)

Find your spellings on a sheet at the end of this document, please note different lists for boys using SIF 2 and SIF 3

### Riddles

**1:** I met a man on London Bridge, he tipped his hat and drew his cane, in this riddle I've told you his name. What is it?

**2:** How many species of animal did Moses take on the ark with him?



**Click the link to hear Mr Coskeran explain this week's literacy work.**

<https://bit.ly/3cEVK2X>

### Reading

My Read at Home

<https://bit.ly/2UIOGlm> (Book 2)

<https://bit.ly/3anS0Si> (Book 3)

### Sounds in Focus Online

Sounds in Focus 2

<https://bit.ly/2UnjnXb>

Student Access Code - five534

Sounds in Focus 3

<https://bit.ly/2JrQLWl>

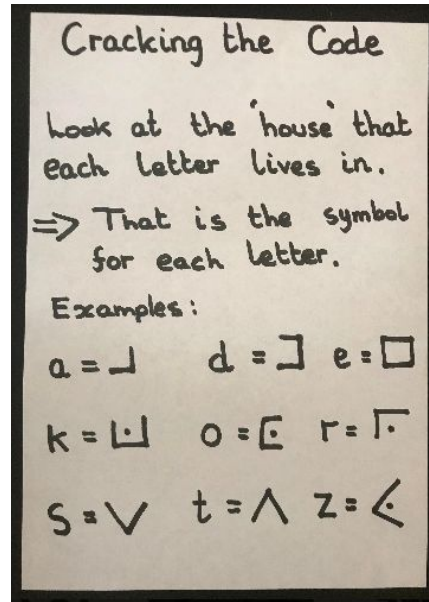

Student Access Code - keep396

Memory Game - Test your memory with different levels of challenges!

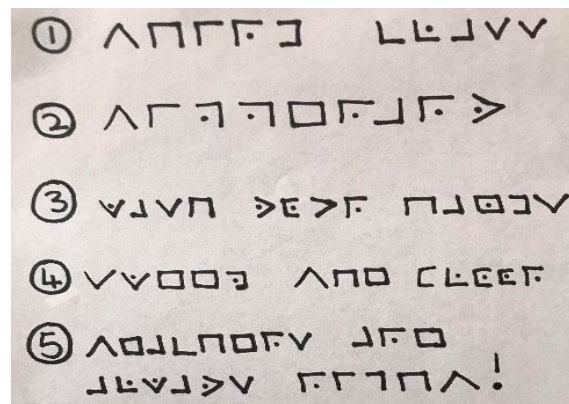
<https://bit.ly/366zYmA>

### Writing:

This week you are going to learn a new top secret writing code!



Can you crack these codes?



### Bonus Work


Cracked all the codes on the left?

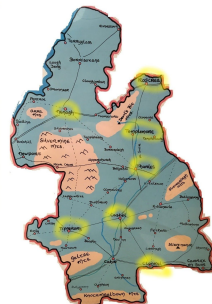
Why not make up your own codes using your new writing language!

Try writing your name using the code!

### Tip:

Write out the code framework in your copy. It will save you having to look at the screen all the time to find the letters.

<p>Gaeilge</p>	<p><b>Léitheoireacht (Reading) (both 3rd classes)</b>  Please log in to Léigh Sa Bhaile <b>see link</b> →  Complete pages 18-20 this week.</p> <p><b>Scríobh an abairt mar is ceart</b>  These sentences are jumbled up, write them correctly.  (Answers will be provided next week)</p> <ol style="list-style-type: none"> <li>1. siopa mé cluiche Cheannaigh sa inné ríomhaire</li> <li>2. bróga Chuir air a Seán peile</li> <li>3. gach obair Bíonn agam oíche bhaile</li> <li>4. pháirc páistí sa súgradh na Bhí ag</li> <li>5. go leabharlann Ní sé dtí dheachaigh an</li> </ol>	<p><b>Click the link to hear Mr Coskeran explain this week's Gaeilge.</b></p> <p><a href="https://bit.ly/2X4EyNI">https://bit.ly/2X4EyNI</a></p> <p><b>Léigh Sa Bhaile</b>  <a href="https://bit.ly/2xtXq0b">https://bit.ly/2xtXq0b</a></p> 
----------------	---	---

<p>Music &amp; Art</p>	<p><b>Music</b> We use <b>Dabbledoo Music</b> for our music lessons in school. They have created a free parent subscription with some very cool musical content &amp; weekly updates to your email.</p> <p>We are going to continue with our 'happy' theme this week. If you have enrolled with Dabbledoo, you will find the song '<b>Happy</b>' by <b>Pharrell Williams</b>. It's a catchy pop song that features in the movie <b>Despicable Me 2</b>. You will also find the lyrics on this site.</p> <p><b>Art</b> Your art project this week links in with our Geography topic - County Tipperary.</p> <p>Draw your own map of Tipperary where you should fill in some of the main towns that we discuss in the SESE section. Ideally, draw this map on an A4 page. (Next week we will add in some more detail so keep your map safe once complete)</p> <p>To support you in this task, we are including some maps including a blank template on this document.</p>	<p><b>Click the link to hear Ms Quinn explain this week's Music, Art and PE.</b> <a href="https://bit.ly/3bF8mWP">https://bit.ly/3bF8mWP</a></p> <p><b>Dabbledoo Music</b> <a href="https://bit.ly/2xnRZPM">https://bit.ly/2xnRZPM</a> (Copy and paste this short link into your web browser address bar. Click on enrol &amp; follow instructions)</p> 
------------------------	---	---

PE and  
Wellbeing

### Offline Activities - Yoga!



Practise these yoga poses. Test your balance and agility. When you get good at each one practise completing a sequence of poses one after another.

**\*Important\*** The 'crow' pose is very hard, your feet are barely lifted off the ground. You can complete this pose with your feet resting on the ground.

### Online Activities

#### Mindfulness

**The House of Shapes - Visualisation for Children**

<https://bit.ly/3cClqfv>

#### Freestyle Hurling Skills

Declan Kelly - 2013 Freestyle hurler winner.

<https://bit.ly/2TdPQyb>

Andy Smith - Galway hurler

<https://bit.ly/3bycJmd>

Try some freestyle hurling skills yourself at home!

Weekly SESE  
project  
(Science/History/  
Geography)

**Topic of the Week** - County Tipperary



Over the next two weeks, we will take a closer look at our county.  
We will complete a mini-profile of Tipperary and examine some key aspects of the map of Tipperary.

This week we will identify:

1. the counties that border (surround) Tipperary and we must remember these aren't all Munster counties.
2. The main towns of County Tipperary - how many can you name before you examine some maps??

You will find maps of Tipperary later in this document and please click on the link where we take a closer look at our home county.

**Task**

Draw your map of Tipperary (as mentioned in Art section above) and fill in the main towns and surrounding counties

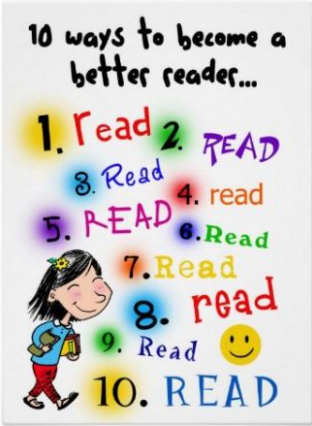
Click on the link to hear some information about Tipperary to help you with these tasks

Click the link to hear Ms Quinn explain this week's Geography topic: County Tipperary

<https://bit.ly/366P3nR>



## OTHER SUGGESTED ACTIVITIES FOR THE WEEK

ACTIVITY	Content	Websites/other instructions
1.	<p>The website on the right is an excellent resource for anybody struggling to find reading material to suit the interests of their child. It's free and easy to access as there is no sign up.</p> 	<p>Read On Website</p> <p>Over 7000 books from a variety of different categories and topics.</p> <p><a href="https://bit.ly/3cEkTLs">https://bit.ly/3cEkTLs</a></p>
2.	<p><b>Card game: Crazy Eights</b></p> <p>Each player is dealt seven cards.</p> <p>The remaining cards are placed face down in the centre of the table, forming a draw pile.</p> <p>The top card of the <b>draw pile</b> is turned face up to start the <b>discard pile</b> next to it.</p> <p>First player adds to the discard pile by playing one card that matches the top card on the discard pile either by suit or by rank (i.e. 6, jack, ace, etc.).</p> <p>A player who cannot match the top card on the discard pile by suit or rank</p>	

	<p>must draw cards until he can play one.</p> <p>When the draw pile is empty, a player who cannot add to the discard pile passes his turn.</p> <p>All <b>eights are wild</b> and can be played on any card during a player's turn.</p> <p>When a player discards an eight, he chooses which suit is now in play.</p> <p>The next player must play either a card of that suit or another eight.</p> <p>The first player to discard all of his cards wins.</p>	
--	--	--

## My Read at Home 2

**Postcard From Paris**

Bonjour Kate,  
That's how you say 'Hello' in French! I'm having a great holiday in Paris. Yesterday I climbed to the top of the Eiffel Tower. I could see all of Paris. (well almost!). Then we went to a restaurant and Daddy ate snails. Ugh! I had a pancake with egg and bacon on it. It was yummy. This morning we went to see the Mona Lisa. It was very small. I still can't tell if she is smiling or frowning. Everyone drives on the other side of the road here, so you have to be extra careful crossing the road.  
See you next week. Wish you were here.  
Amy XXX

Ms Kate Smithers  
100 New Street  
Cork City  
Ireland

**CHECK-UP**

- 1 Who was the card sent to?
- 2 What is the French for 'Hello'?
- 3 What tower did Amy climb?
- 4 What did Amy eat in the restaurant?
- 5 What did she find strange about the Mona Lisa?


50 WEEK 13 • DAY 2

## My Read at Home 3

# CARS

The first 'car' was made by a Frenchman called Nicolas Cugnot in 1769. This 'car' ran on steam. It was used by the French army to pull heavy cannons!

In the olden days, cars were not allowed to be driven faster than a person walking. A man carrying a red flag had to walk in front of the car to warn people that it was coming. These cars were called *horseless carriages*.



In 1886, two German engineers named Karl Benz and Gottlieb Daimler invented cars with engines. These cars ran quite like the cars we have nowadays.

In 1903, Henry Ford set up the Ford Motor Company in America. In 1908, the Ford Motor Company made a car called the Ford Model T. The company made millions of these cheaper cars. People could now afford to buy them. These cars were very popular all over the world.

In the early days, only very rich people had cars. Nowadays, many people have cars. Cars are getting better all of the time. They are safer and cleaner than they used to be. This is better for our world. I wonder what sort of car you will be driving when you grow up. ■



### CHECK-UP

- 1 Who made the first 'car'?
- 2 Who had to walk in front of cars in the early days? Why?
- 3 What were these first cars called?
- 4 In what year was the Ford Motor Company set up?
- 5 Why was the Ford Model T car so popular?

Name: \_\_\_\_\_

### Gaeilge

X	T	K	U	S	H	U	I	L	R	H	V
Y	H	V	E	I	B	H	I	D	D	I	D
S	O	H	S	D	E	I	R	I	G	H	F
H	S	D	O	S	C	A	I	L	U	Z	H
E	A	C	H	O	N	A	I	C	Z	T	A
A	I	A	V	P	H	H	T	U	M	O	G
S	G	H	I	C	H	U	A	L	A	M	E
J	H	A	Y	D	F	H	E	A	C	H	B

Find the following words in the puzzle.  
Words are hidden → and ↓.

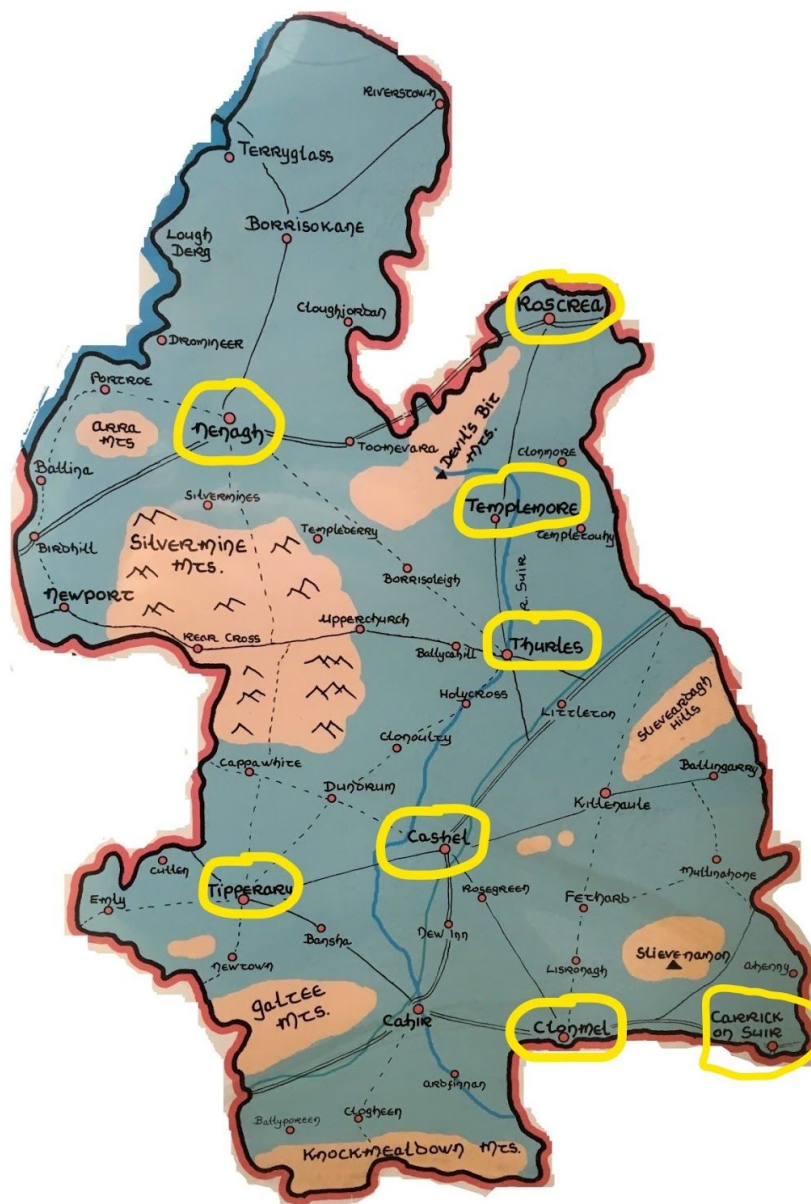
BHI  
CHONAIC  
CHUALA  
DEIRIGH

DFHAG  
DFHEACH  
DOSCAIL  
SHEAS

SHUIL  
THOSAIGH







On this map, you can see the main towns of Tipperary have been highlighted for you. You should familiarise yourself with the location of these towns and fill them in on your own map.

Clonmel  
Nenagh  
Carrick-on-Suir  
Templemore


Thurles  
Cashel  
Tipperary  
Roscrea






## New Wave Mental Maths

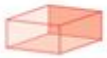
### MONDAY

- What is the chance of the sun not rising tomorrow?  
☐ impossible   ☐ possible   ☐ certain
- $100 - 35 =$  \_\_\_\_\_
- $650 + 150 =$  \_\_\_\_\_
- 9, 18, \_\_\_\_\_, 36
- $17 - 7 =$  \_\_\_\_\_
- How many corners? \_\_\_\_\_ 
- 25, 50, 75, \_\_\_\_\_, 125
- $7 \times 0 =$  \_\_\_\_\_
- 1 L = \_\_\_\_\_ mL
- $15 + 15 =$  \_\_\_\_\_
- 1 kg = \_\_\_\_\_ g
- $36 - 9 - 9 =$  \_\_\_\_\_
- $3 + 7 + 3 + 7 =$  \_\_\_\_\_
- How many faces has a cube? \_\_\_\_\_
- $9 + 9 + 9 =$  \_\_\_\_\_

### TUESDAY

- $1\frac{1}{2}$  hours = \_\_\_\_\_ hour(s) \_\_\_\_\_ minute(s)
- $3 + 9 =$  \_\_\_\_\_
- $9 + 9 + 9 + 9 = 4 \times 9 =$  \_\_\_\_\_
- $\text{€}1.00 - 55\text{c} =$  \_\_\_\_\_ c
- $27 - 9 - 9 =$  \_\_\_\_\_
- What is the chance that you will play outside this evening?  
☐ impossible   ☐ possible   ☐ certain
- Share 36 carrots equally among 9 rabbits.  
 \_\_\_\_\_ carrots each
- Complete the sequence.  

- $12 + 12 + 12 + 12 =$  \_\_\_\_\_
- \_\_\_\_\_  $\times 6 = (5 \times 6) + (1 \times 6) = 36$
- The date is the 17th of March.  
 What will the date be in one week?

### WEDNESDAY

- $2\frac{1}{2}$  hours = \_\_\_\_\_ hour(s) \_\_\_\_\_ minute(s)
- $\text{€}9.05 =$  \_\_\_\_\_ c
- Name this 3-D shape. 
- $8 + 9 =$  \_\_\_\_\_
- 125, 150, \_\_\_\_\_, 200, 225
- $4 + 4 + 4 + 4 =$  \_\_\_\_\_
- How many minutes in one hour?  
 \_\_\_\_\_
- 30, 35, 40, \_\_\_\_\_, 50
- How many faces has a triangular prism?  
 \_\_\_\_\_
- Double 18.  
 \_\_\_\_\_
- Would you be more likely to buy a kilogram or a kilometre of sausages?  
 \_\_\_\_\_
- $$\begin{array}{r} 203 \\ + 324 \\ \hline \end{array}$$
- $27 \times 10 =$  \_\_\_\_\_

## Bonus Time Revision Questions

TRAIN TIMETABLE				
Depford	8.20 a.m.	11.40 a.m.	3.10 p.m.	7.15 p.m.
Chooton	8.35 a.m.	11.55 a.m.	3.30 p.m.	7.30 p.m.
Sixby	8.45 a.m.	12.05 p.m.	3.45 p.m.	7.40 p.m.
Onslow	9.05 a.m.	12.25 p.m.	4.10 p.m.	8.00 p.m.
Gurnley	9.10 a.m.	12.40 p.m.	4.20 p.m.	8.05 p.m.
Fedmouth	9.30 a.m.	1.00 p.m.	4.50 p.m.	8.25 p.m.

16. What time is the last train from Gurnley? \_\_\_\_\_
17. Does the 2nd train take 20 minutes to get from Sixby to Onslow? \_\_\_\_\_
18. You need to be in Fedmouth by 1.30 p.m. What time do you catch a train from Chooton? \_\_\_\_\_
19. How long does the 1st train take to get from Depford to Fedmouth?  
\_\_\_\_\_ hour(s) \_\_\_\_\_ minute(s)
20. Is the 3rd train faster than the 1st train? \_\_\_\_\_

**Bonus Bonus Question: Make your own bus or train timetable!**

Sounds In Focus 3 (Brown book) Unit 32 18/05/20

Monday & Tuesday Sound: ch tch

Wednesday and Thursday Sound: sh ch ti ci

Write out and learn spellings as usual.

Use words in **bold** to complete sentences (one per day)

Monday	Tuesday	Wednesday	Thursday
approach butcher chief which <b>manufacture</b>	exchange teacher picture research <b>moisture</b>	competition connection finish information <b>insurance</b>	shallow shrink shouldn't tissue <b>profession</b>
<p><b><u>manufacture</u></b></p> <ul style="list-style-type: none"> <li>(verb) To make things with machines, especially in large quantities  <i>(A local business manufactures great quality hurleys.)</i></li> </ul> <p><b><u>moisture</u></b></p> <ul style="list-style-type: none"> <li>(noun) tiny drops of water in the air or on a surface  <i>(During this dry spell there has been very little moisture in the air.)</i></li> </ul> <p><b><u>insurance</u></b></p> <ul style="list-style-type: none"> <li>(noun) a business agreement to receive money or compensation if you suffer a loss or injury, in return for a regular payment <i>(He took out travel insurance before going on holidays.)</i></li> </ul> <p><b><u>profession</u></b></p> <ul style="list-style-type: none"> <li>(noun) a type of work for which you need special knowledge and training  <i>(He left the legal profession to start his own business.)</i></li> </ul>			

## Sounds In Focus 2 (Purple book) Unit 32 18/05/20

Monday & Tuesday Sound: ch tch

Wednesday and Thursday Sound: sh ch ti ci

Write out and learn spellings as usual.

Use words in **bold** to complete sentences (one per day)

Monday	Tuesday	Wednesday	Thursday
chop church child watch <b>exchange</b>	match lunch children chill <b>research</b>	shut action shook share <b>information</b>	shred should sharp shall <b>station</b>
<p><b>exchange</b></p> <ul style="list-style-type: none"> <li>(Verb) to give something and receive something else for it (<i>I exchanged phone numbers with a new friend at work.</i>)</li> </ul> <p><b>research</b></p> <ul style="list-style-type: none"> <li>(noun) a careful study or investigation to learn more about a subject (<i>I completed a research project on the Amazon Rainforest for school.</i>)</li> </ul> <p><b>information</b></p> <ul style="list-style-type: none"> <li>(noun) facts or what someone tells you (<i>I found lots of information online for my research project.</i>)</li> </ul> <p><b>station</b></p> <ul style="list-style-type: none"> <li>(noun) a set of buildings where people get on/off buses</li> <li>A building for police, firemen or other workers who serve the public</li> <li>A place from which radio or television broadcasts are made (<i>Ryan Tubridy presents his show from the RTE radio station</i>)</li> </ul>			

## Answers to time task questions

## Answers to last week's 'Scríobh an abairt mar is ceart'

	Task 1	Task 2	Task 3
A	$\frac{1}{2}$ past 6	6:30	10 to 8
B	$\frac{1}{4}$ past 12	12:15	25 to 2
C	$\frac{1}{4}$ to 12	11:45	5 past 1
D	5 o'clock	5:00	20 past 6
E	10 past 7	7:10	$\frac{1}{2}$ past 8
F	5 past 4	4:05	25 past 5
G	20 past 1	1:20	20 to 3
H	25 past 8	8:25	$\frac{1}{4}$ to 10
I	7 o'clock	7:00	20 past 8
J	$\frac{1}{4}$ past 2	2:15	25 to 4
K	5 to 11	10:55	$\frac{1}{4}$ past 12
L	5 past 12	12:05	25 past 1

Master Your Maths Week 30 Answers

WEEK 30				
Monday	Tuesday	Wednesday	Thursday	WEEK 30 – TEST
1. 685	1. 7h, 0t, 8u	1. €6.78	1. 145, 342, 456	1. 299, 301
2. 270	2. 42	2. Yes	2. 10	2. 250
3. 3:25	3. 769	3. 4, 8	3. 70	3. 259
4. 6, 9	4. 5 to 7	4. 3 R1	4. 4m 57cm	4. 85
5. 0	5. b	5. 915	5. 56	5. 4m 35cm
6. 8 R2	6. 2	6. 6 in 12	6. 9	6. €58.70
7. March	7. $\frac{4}{10}$ or $\frac{2}{5}$	7. 3 in 12	7. 125c	7. ----
8. 0.5, 0.7, 0.9	8. 72	8. 2 in 12	8. 7	8. 35
9. $\frac{6}{10}$ or $\frac{3}{5}$	9. November	9. 1 in 12	9. 760	9. c
10. €3.40	10. <	10. yellow	10. 5kg 798g	10. ----
11. 16, 32	11. 5 R1	11. green	11. 64	11. 8
12. 25	12. 5	12. <	12. 1st May	12. 290
13. 52	13. 4:45	13. 120	13. 6	13. 6 R3
14. €5.35	14. 40	14. 40 minutes	14. 12	14. 1, 1
15. 260	15. 8:30	15. 5	15. 24	15. 500ml
16. 392	16. 55	16. 128	16. 18	16. 62
				17. 7
				18. 2kg 80g
				19. €3.25
				20. =

WARNING - TURN BACK!

Below are the answers to this week’s maths puzzle and riddles written upside down. If you haven't tried them yet go back, have a go, and check back later to see if you were right!

Riddle 1: Andrew (and drew)    Riddle 2: None as it was Noah not Moses on the ark! Maths

Puzzle 1:  $6 - 4 + 1 = 3$  or  $8 - 4 - 1 = 3$

The answer is 1. The number of joints is the key (see circled). It decreases from 6,5,4, 3, 2 and finally just 1 joining!